


CLASS 1A'S MATH EXERCISE

SNAKES, SKIP COUNTING, & MISSING NUMBERS

The snakes are missing some numbers! Fill in the blanks with the correct answer. Make sure you count by 2s, 3s, 5s, and 10s.

NAME: _____
SECTION: _____

DATE: _____
SCORE: _____




2




6



12



3



12



18




10



20



35



40



60

