

The Neighborhood Babysitting Club

Name: _____

Teacher: _____


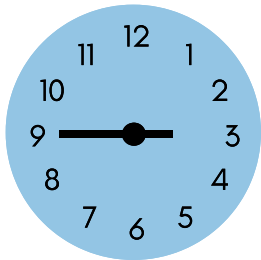
Grade & Section: _____

Date: _____

Elena, Jada, Billie, and Eun-hye have started a neighborhood babysitting club. To split their earnings, they decided to base it according to how much time they've worked.

Help them out by writing down what time each person started, what time they finished, and how much time they worked based on those.

Elena





Start: _____

End: _____

Total Time Worked: _____

Jada





Start: _____

End: _____

Total Time Worked: _____

Billie





Start: _____

End: _____

Total Time Worked: _____

Eun-hye



Start: _____

End: _____

Total Time Worked: _____